

Studio II

Home TV Programmer

TV School House I

Social Studies

The nine quizzes in the Yellow Series make use of Social Studies information and thought processes involved in the areas of U.S. and World Geography, U.S. History, Government, World Cultures, Graph Interpretation, and Map Reading.

Mathematics

The nine quizzes in the Yellow Series make use of the basic mathematical skills of addition, subtraction, multiplication, division, measurement, Roman numerals, and logic. The quizzes provide an opportunity for fun and practice in thinking about and working with numbers quickly and accurately.

Yellow Series Elementary

Cartridge 18V500

RCA

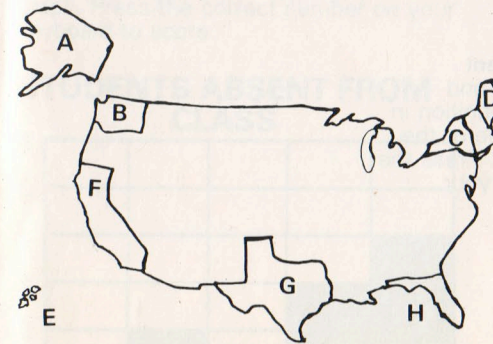
HOW TO PLAY:

1. Don't start until each player has a copy of the quiz booklet ready.
2. Insert the TV School House cartridge into the programmer.
3. Press CLEAR button—an "S" will appear on the screen, which indicates the start of the game.
4. Press a "1" or "2" on the "A" keyboard. Pressing "2" will give you more time to answer each question. (Pressing "1" gives you approximately 10 seconds, pressing "2" gives you approximately 20 seconds.)
5. Decide which Quiz you want to play and press the number of that quiz on the "A" keyboard.
6. STUDIO II will show a letter—A to H—next to an empty box. The letter tells you which question to answer. Look at your quiz booklet, read the question, decide on the right answer, and press the number of the correct answer on your keyboard. As a two player game, the object is to press the right answer key before your opponent does to get the highest score. You can also use the game alone on either keyboard. As a two player game, if the wrong answer is pressed by either player, the word "NO" appears, and the player pressing the wrong answer is locked out, the other player has the chance to press the right answer and score if he does so before the next question appears. You get 1 to 10 points for a right answer depending on how fast you answer the question. 120 is a perfect score. You only get one answer to a question. If the question is not answered in the allotted time, the next question is shown. The quiz ends after 12 questions.
7. Press CLEAR key after game is over before removing cartridge.

STUDIO II SELECTS THE QUESTIONS AT RANDOM SO THAT YOU NEVER KNOW IN WHAT ORDER YOU WILL HAVE TO ANSWER.

1. State Location

Look at the States outlined on the map. Find the name of the State that belongs to each letter. To score, press the number on your keyboard that corresponds to the correct name.



0	California
1	Florida
2	Maine
3	Texas
4	Nebraska
5	New York
6	Vermont
7	Washington
8	Alaska
9	Hawaii

2. Structure of Our Government

Below are listed names of important positions or groups in local, state, and national government. Read the definition in Column I. In Column II find the title of the position or group being described. Press the number of the correct answer on your keyboard to score.

Column I

A	Married to the President
B	Leader of our Nation
C	There are 435 of them in Congress
D	Two are elected from each state
E	Nine Judges from this important Review Board
F	Head of City Government
G	Second Highest Office in our Nation
H	Head of State Government


Column II

1	Governor
2	First Lady
3	Mayor
4	President
5	Representatives
6	Senator
7	Supreme Court
8	Vice President

3. Interpreting a Graph

Read the question and then find the correct answer using the information given in the graph. Press the correct number on your keyboard to score.

STUDENTS ABSENT FROM CLASS



A	How many students were absent on Wednesday?
B	How many students were absent on Thursday?
C	How many students were absent on Monday and Friday?
D	How many more students were absent on Thursday than on Wednesday?
E	How many more students were absent on Tuesday than on Monday?
F	How many students were absent on Thursday and Friday?
G	On the day when the most students were gone, how many students were absent?
H	How many students were absent on Monday and Tuesday?

4. World Awareness

Which country listed in Column II is **most** likely to have the item listed in Column I. Press the number of the correct country on your keyboard to score.

REMEMBER: The programmer selects the letter of the question you are to answer.

Column I		Column II	
Question Letter	Question	Answer No.	Answer
A	Bull Fighting	1	England
B	Berlin Wall	2	Egypt
C	Hamburgers	3	Germany
D	Changing of the Guard	4	Holland
E	Rice	5	Japan
F	Pyramids	6	Russia
G	Siberia	7	Spain
H	Tulips	8	United States

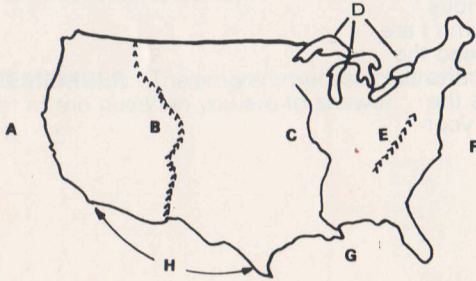
5. Revolutionary War Figures

In Column II are the names of famous Revolutionary War people. In Column I are things these people did or said. Read the statement in Column I and match it to the correct person in Column II. Press the number of the correct answer on your keyboard to score.

Column I		Column II	
A	"Give Me Liberty or Give Me Death"	1	Abigail Adams
B	First Signature on the Declaration of Independence	2	John Adams
C	Midnight Rider	3	John Hancock
D	Commander of Continental Army	4	Patrick Henry
E	First U.S. President	5	Thomas Jefferson
F	American Flag Seamstress	6	Paul Revere
G	Declaration of Independence Author	7	Betsy Ross
H	First U.S. Vice President & Second U.S. President	8	George Washington

6. U.S. Topography

Identify each area marked on the map.
Find the number that corresponds to the correct answer and press that number on your keyboard to score.



0	Canadian Border
1	Gulf of Mexico
2	Rocky Mountains
3	Appalachian Mountains
4	Great Lakes
5	Pacific Ocean
6	Mississippi River
7	Atlantic Ocean
8	Ohio River
9	Mexican Border

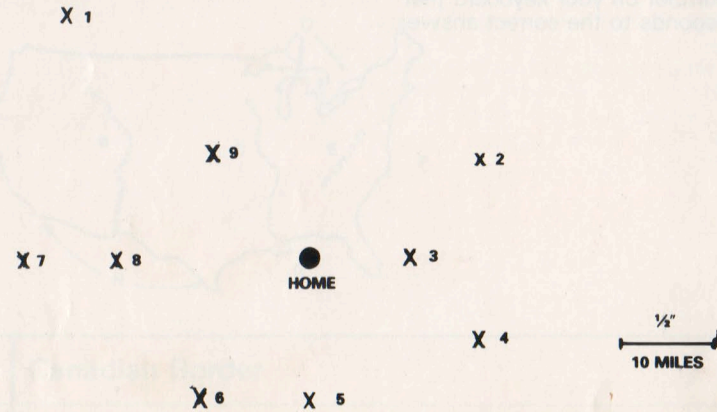
7. Explorers

Match the name of the explorer (from Column I) to the discovery (from Column II) for which he is most famous. To score, press the number on your keyboard that corresponds to the correct answer.

Column I		Column II	
A	Neil Armstrong	1	Africa
B	Christopher Columbus	2	China
C	Leif Ericson	3	Rocky Mountains
D	Lewis & Clark	4	North America 1000
E	Dr. David Livingston	5	First Around the World
F	Zebulon Pike	6	Moon
G	Magellan	7	From Missouri to Pacific Ocean
H	Marco Polo	8	America 1492

8. Map Reading

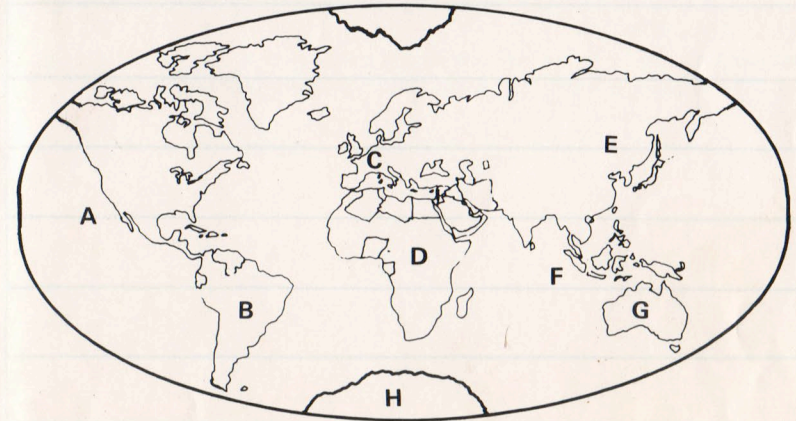
Each X on the map represents a city. Each city has a number. Press the number on your keyboard to correctly answer the question given.



A	What city is directly south of home?
B	What city is northeast from home?
C	Which city is furthest from home?
D	Which city is furthest west?
E	Which city is south of city "2"?
F	Which city is ten miles from home?
G	Which city is southwest from home?
H	Which city is twenty miles from home?

9. World Geography

Identify the area on the world map that each letter represents. Find the number that corresponds to the correct answer and press that number on your keyboard to score.



1	South America
2	Asia
3	Pacific Ocean
4	Indian Ocean
5	Australia
6	Antarctica
7	Europe
8	Africa

1. Addition

What number belongs in the box? Press the right number to score.

For example: $1 + 1 = \square$. Two is the correct answer, so you would press 2 on your keyboard to score.

Remember: The programmer will select the letter of the question you are to answer.

A	$3 + 5 = \square$
B	$4 + 3 = \square$
C	$2 + \square = 7$
D	$0 + 2 = \square$
E	$\square + 3 = 12$
F	$4 + (-4) = \square$
G	$2 + 1 + 0 = \square$
H	$1 + 8 = 8 + \square$

2. Subtraction

What number belongs in the empty box? Press the right number to score.

For example: $8 - 3 = \square$. Five is the correct answer, so you would press 5 on your keyboard.

Remember: The programmer will select the letter of the question you are to answer.

A	$9 - \square = 7$
B	$6 - \square = 2$
C	$11 - 6 = \square$
D	$8 - 2 = \square$
E	$12 - \square = 5$
F	$10 - \square = 7$
G	$13 - 5 = \square$
H	$15 - 14 = \square$

3. Sequences

What number belongs in the box to make the sequence correct? Press that number to score.

For example: 1, 2, 3, \square . Four is the number that makes the sequence correct, so you would press 4 on your keyboard to score.

Remember: The programmer will select the letter of the question you are to answer.

A	1, 1, 1, 1, \square
B	14, 3, 13, 3, 12, \square
C	3, 3, 4, 4, 5, \square
D	10, 8, 6, 4, \square
E	1, 2, 1, 3, 1, 4, \square
F	1, 2, 4, 5, \square , 8, 10, 11
G	3, 2, 4, 3, 5, \square
H	11, 9, 7, 5, \square

4. Multiplication

What number belongs in the box? Press that number to score.

For example: $3 \times \square = 3$. One is the correct answer, so you would press 1 on your keyboard to score.

Look at the screen to find the letter of the question you are to answer.

Remember: The programmer selects the letter of the question you are to answer.

A	$10 \times \square = 70$
B	$7 \times \square = 21$
C	$4 \times 2 = \square$
D	$2 \times \square = 2$
E	$3 \times \square = 15$
F	$\square \times 6 = 12$
G	$3 \times 2 = \square$
H	$\square \times 9 = 36$

5. Division

What number belongs in the box? Press that number to score.

For example: $\square \overline{)10^5}$. Two is the correct answer so you would press 2 on your keyboard to score.

Remember: The programmer will select the letter of the question you are to answer.


A	$\square \overline{)8} = 2$
B	$9 \div 3 = \square$
C	$4 \overline{)24} = \square$
D	$88 \div \square = 11$
E	$56 \div 7 = \square$
F	$\square \overline{)21} = 3$
G	$5 \overline{)25} = \square$
H	$\frac{36}{18} = \square$

6. Measurements

What number belongs in the box? Press that number to score.

For example: 1 dime = \square nickels. Two is the correct answer so you would press 2 on your keyboard to score.

Remember: The programmer selects the letter of the question you are to answer.

A	1 nickel = \square pennies
B	1 quart = \square pints
C	1½ gallons = \square quarts
D	1 dollar = \square quarters
E	1 yard = \square feet
F	 = \square o'clock
G	1000 grams = \square kilogram
H	900 centimeters = \square meters

7. Roman Numerals

What Arabic number is represented by the Roman Numerals given? Press that number to score.

For example: VII = . Seven is the correct answer, so you would press 7 on your keyboard to score.

Remember: The programmer will select the letter of the question you are to answer.

A	VI = <input type="checkbox"/>
B	III + V = <input type="checkbox"/>
C	II + II = <input type="checkbox"/>
D	V + II = <input type="checkbox"/>
E	X - IX = <input type="checkbox"/>
F	II + I = <input type="checkbox"/>
G	V = <input type="checkbox"/>
H	II = <input type="checkbox"/>

8. Math Mixture

What number belongs in the box? Press that number to score.

This quiz provides practice in answering quickly questions involving addition, subtraction, multiplication, and division.

Remember: The programmer selects the letter of the question you are to answer.

A	$20 + \square = 25$
B	$\square \sqrt{16} = 8$
C	$1 \times 1 = \square$
D	$2 + 5 = \square$
E	$\square \times 6 = 24$
F	$\frac{27}{9} = \square$
G	$5 + 1 + 0 = \square$
H	$19 - 11 = \square$

9. Math Mixture

Notes

1. The number of units in the lot is 1000 units.
2. The number of units in the lot is 1000 units.

3. The number of units in the lot is 1000 units.
4. The number of units in the lot is 1000 units.

5. The number of units in the lot is 1000 units.
6. The number of units in the lot is 1000 units.

RCA Distributor and
Special Products Division